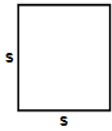





- 1) Find area of square having each side (s) equals 24 in



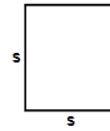
Answer: \_\_\_\_\_

- 2) Find area of square having each side (s) equals 33 m



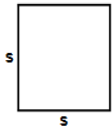
Answer: \_\_\_\_\_

- 3) Find area of square having each side (s) equals 92 in




Answer: \_\_\_\_\_

- 4) Find area of square having each side (s) equals 40 cm



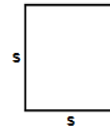
Answer: \_\_\_\_\_

- 5) Find area of square having each side (s) equals 36 m



Answer: \_\_\_\_\_

- 6) Find area of square having each side (s) equals 33 cm



Answer: \_\_\_\_\_

- 7) Find area of square having each side (s) equals 87 ft



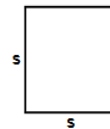
Answer: \_\_\_\_\_

- 8) Find area of square having each side (s) equals 8 m



Answer: \_\_\_\_\_

- 9) Find area of square having each side (s) equals 26 in



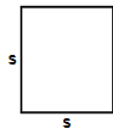
Answer: \_\_\_\_\_

- 10) Find area of square having each side (s) equals 44 cm



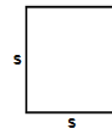
Answer: \_\_\_\_\_

- 11) Find area of square having each side (s) equals 82 cm



Answer: \_\_\_\_\_

- 12) Find area of square having each side (s) equals 33 m



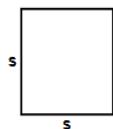
Answer: \_\_\_\_\_

- 13) Find area of square having each side (s) equals 19 in



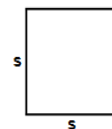
Answer: \_\_\_\_\_

- 14) Find area of square having each side (s) equals 22 ft



Answer: \_\_\_\_\_


- 15) Find area of square having each side (s) equals 5 m



Answer: \_\_\_\_\_




16)

Find area of square  
having each side (s)  
equals 11 cm

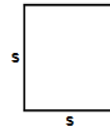
Answer: \_\_\_\_\_

17)

Find area of square  
having each side (s)  
equals 46 ft


Answer: \_\_\_\_\_

18)

Find area of square  
having each side (s)  
equals 25 in

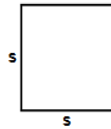
Answer: \_\_\_\_\_

19)

Find area of square  
having each side (s)  
equals 80 ft

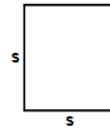
Answer: \_\_\_\_\_

20)

Find area of square  
having each side (s)  
equals 65 ft

Answer: \_\_\_\_\_

21)

Find area of square  
having each side (s)  
equals 53 ft


Answer: \_\_\_\_\_

22)

Find area of square  
having each side (s)  
equals 75 m

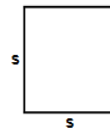
Answer: \_\_\_\_\_

23)

Find area of square  
having each side (s)  
equals 44 in

Answer: \_\_\_\_\_

24)

Find area of square  
having each side (s)  
equals 41 ft


Answer: \_\_\_\_\_

25)

Find area of square  
having each side (s)  
equals 75 m

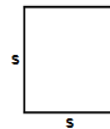
Answer: \_\_\_\_\_

26)

Find area of square  
having each side (s)  
equals 40 cm

Answer: \_\_\_\_\_

27)

Find area of square  
having each side (s)  
equals 72 ft

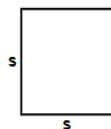
Answer: \_\_\_\_\_

28)

Find area of square  
having each side (s)  
equals 76 cm

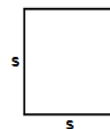
Answer: \_\_\_\_\_

29)

Find area of square  
having each side (s)  
equals 85 in

Answer: \_\_\_\_\_


30)

Find area of square  
having each side (s)  
equals 27 in

Answer: \_\_\_\_\_




31)

Find area of square  
having each side (s)  
equals 8 m

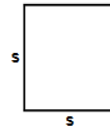
Answer: \_\_\_\_\_

32)

Find area of square  
having each side (s)  
equals 92 in


Answer: \_\_\_\_\_

33)

Find area of square  
having each side (s)  
equals 47 in

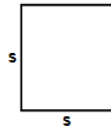
Answer: \_\_\_\_\_

34)

Find area of square  
having each side (s)  
equals 49 in

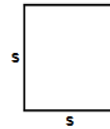
Answer: \_\_\_\_\_

35)

Find area of square  
having each side (s)  
equals 16 in

Answer: \_\_\_\_\_

36)

Find area of square  
having each side (s)  
equals 50 ft


Answer: \_\_\_\_\_

37)

Find area of square  
having each side (s)  
equals 29 m

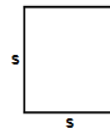
Answer: \_\_\_\_\_

38)

Find area of square  
having each side (s)  
equals 81 m

Answer: \_\_\_\_\_

39)

Find area of square  
having each side (s)  
equals 63 m


Answer: \_\_\_\_\_

40)

Find area of square  
having each side (s)  
equals 94 in

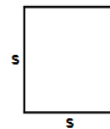
Answer: \_\_\_\_\_

41)

Find area of square  
having each side (s)  
equals 80 in

Answer: \_\_\_\_\_

42)

Find area of square  
having each side (s)  
equals 61 cm

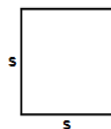
Answer: \_\_\_\_\_

43)

Find area of square  
having each side (s)  
equals 41 in

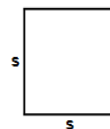
Answer: \_\_\_\_\_

44)

Find area of square  
having each side (s)  
equals 13 ft

Answer: \_\_\_\_\_

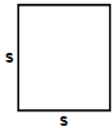
45)

Find area of square  
having each side (s)  
equals 72 cm

Answer: \_\_\_\_\_




- 46) Find area of square having each side (s) equals 79 cm




Answer: \_\_\_\_\_

- 47) Find area of square having each side (s) equals 30 cm



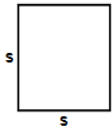
Answer: \_\_\_\_\_

- 48) Find area of square having each side (s) equals 81 in



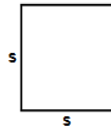
Answer: \_\_\_\_\_

- 49) Find area of square having each side (s) equals 97 cm



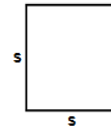
Answer: \_\_\_\_\_

- 50) Find area of square having each side (s) equals 14 cm



Answer: \_\_\_\_\_

- 51) Find area of square having each side (s) equals 76 in



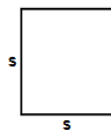
Answer: \_\_\_\_\_

- 52) Find area of square having each side (s) equals 50 cm



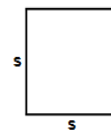
Answer: \_\_\_\_\_

- 53) Find area of square having each side (s) equals 55 ft



Answer: \_\_\_\_\_

- 54) Find area of square having each side (s) equals 82 in




Answer: \_\_\_\_\_

- 55) Find area of square having each side (s) equals 26 m



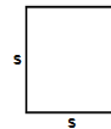
Answer: \_\_\_\_\_

- 56) Find area of square having each side (s) equals 42 m



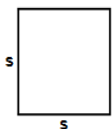
Answer: \_\_\_\_\_

- 57) Find area of square having each side (s) equals 31 cm



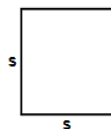
Answer: \_\_\_\_\_

- 58) Find area of square having each side (s) equals 63 ft



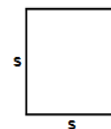
Answer: \_\_\_\_\_

- 59) Find area of square having each side (s) equals 53 cm



Answer: \_\_\_\_\_


- 60) Find area of square having each side (s) equals 26 in



Answer: \_\_\_\_\_




- 61) Find area of square having each side (s) equals 85 cm




Answer: \_\_\_\_\_

- 62) Find area of square having each side (s) equals 6 m




Answer: \_\_\_\_\_

- 63) Find area of square having each side (s) equals 8 ft



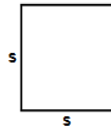
Answer: \_\_\_\_\_

- 64) Find area of square having each side (s) equals 90 m



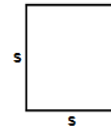
Answer: \_\_\_\_\_

- 65) Find area of square having each side (s) equals 61 ft



Answer: \_\_\_\_\_

- 66) Find area of square having each side (s) equals 67 cm




Answer: \_\_\_\_\_

- 67) Find area of square having each side (s) equals 48 m



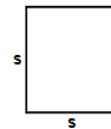
Answer: \_\_\_\_\_

- 68) Find area of square having each side (s) equals 86 m



Answer: \_\_\_\_\_

- 69) Find area of square having each side (s) equals 100 m




Answer: \_\_\_\_\_

- 70) Find area of square having each side (s) equals 56 m



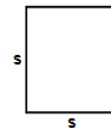
Answer: \_\_\_\_\_

- 71) Find area of square having each side (s) equals 55 cm



Answer: \_\_\_\_\_

- 72) Find area of square having each side (s) equals 16 in



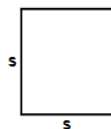
Answer: \_\_\_\_\_

- 73) Find area of square having each side (s) equals 15 in



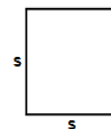
Answer: \_\_\_\_\_

- 74) Find area of square having each side (s) equals 94 cm



Answer: \_\_\_\_\_


- 75) Find area of square having each side (s) equals 71 cm



Answer: \_\_\_\_\_




76)

Find area of square  
having each side (s)  
equals 79 m

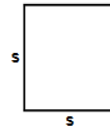
Answer: \_\_\_\_\_

77)

Find area of square  
having each side (s)  
equals 8 in


Answer: \_\_\_\_\_

78)

Find area of square  
having each side (s)  
equals 56 m

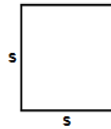
Answer: \_\_\_\_\_

79)

Find area of square  
having each side (s)  
equals 14 in

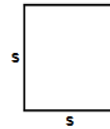
Answer: \_\_\_\_\_

80)

Find area of square  
having each side (s)  
equals 49 ft

Answer: \_\_\_\_\_

81)

Find area of square  
having each side (s)  
equals 53 cm


Answer: \_\_\_\_\_

82)

Find area of square  
having each side (s)  
equals 65 cm

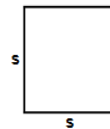
Answer: \_\_\_\_\_

83)

Find area of square  
having each side (s)  
equals 58 ft

Answer: \_\_\_\_\_

84)

Find area of square  
having each side (s)  
equals 22 in


Answer: \_\_\_\_\_

85)

Find area of square  
having each side (s)  
equals 15 in

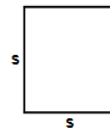
Answer: \_\_\_\_\_

86)

Find area of square  
having each side (s)  
equals 86 in

Answer: \_\_\_\_\_

87)

Find area of square  
having each side (s)  
equals 57 m

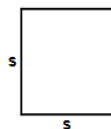
Answer: \_\_\_\_\_

88)

Find area of square  
having each side (s)  
equals 73 m

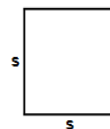
Answer: \_\_\_\_\_

89)

Find area of square  
having each side (s)  
equals 58 cm

Answer: \_\_\_\_\_

90)

Find area of square  
having each side (s)  
equals 58 cm

Answer: \_\_\_\_\_

Name: \_\_\_\_\_

February 18, 2021

# MATHS WORKSHEET

GENERATOR




11-PLUS  
SATS  
GCSES



Sr: 18022021-2052


91)



Find area of square having each side (s) equals 66 cm

Answer: \_\_\_\_\_

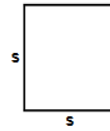
92)



Find area of square having each side (s) equals 50 m

Answer: \_\_\_\_\_


93)



Find area of square having each side (s) equals 34 cm

Answer: \_\_\_\_\_

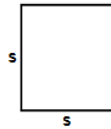
94)



Find area of square having each side (s) equals 49 m

Answer: \_\_\_\_\_

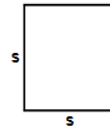
95)



Find area of square having each side (s) equals 49 cm

Answer: \_\_\_\_\_

96)



Find area of square having each side (s) equals 51 m

Answer: \_\_\_\_\_

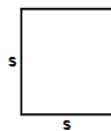
97)



Find area of square having each side (s) equals 90 ft

Answer: \_\_\_\_\_

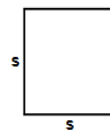
98)



Find area of square having each side (s) equals 20 m

Answer: \_\_\_\_\_

99)



Find area of square having each side (s) equals 14 m

Answer: \_\_\_\_\_

100)



Find area of square having each side (s) equals 98 m

Answer: \_\_\_\_\_

Total: \_\_\_\_ / 100

Name: \_\_\_\_\_

Sr: 18022021-2052

February 18, 2021

# MATHS WORKSHEET

GENERATOR

11-PLUS  
SATS  
GCSES



## Answers:

- |            |            |            |            |            |            |            |
|------------|------------|------------|------------|------------|------------|------------|
| 1) 576in   | 2) 1089m   | 3) 8464in  | 4) 1600cm  | 5) 1296m   | 6) 1089cm  | 7) 7569ft  |
| 8) 64m     | 9) 676in   | 10) 1936cm | 11) 6724cm | 12) 1089m  | 13) 361in  | 14) 484ft  |
| 15) 25m    | 16) 121cm  | 17) 2116ft | 18) 625in  | 19) 6400ft | 20) 4225ft | 21) 2809ft |
| 22) 5625m  | 23) 1936in | 24) 1681ft | 25) 5625m  | 26) 1600cm | 27) 5184ft | 28) 5776cm |
| 29) 7225in | 30) 729in  | 31) 64m    | 32) 8464in | 33) 2209in | 34) 2401in | 35) 256in  |
| 36) 2500ft | 37) 841m   | 38) 6561m  | 39) 3969m  | 40) 8836in | 41) 6400in | 42) 3721cm |
| 43) 1681in | 44) 169ft  | 45) 5184cm | 46) 6241cm | 47) 900cm  | 48) 6561in | 49) 9409cm |
| 50) 196cm  | 51) 5776in | 52) 2500cm | 53) 3025ft | 54) 6724in | 55) 676m   | 56) 1764m  |
| 57) 961cm  | 58) 3969ft | 59) 2809cm | 60) 676in  | 61) 7225cm | 62) 36m    | 63) 64ft   |
| 64) 8100m  | 65) 3721ft | 66) 4489cm | 67) 2304m  | 68) 7396m  | 69) 10000m | 70) 3136m  |
| 71) 3025cm | 72) 256in  | 73) 225in  | 74) 8836cm | 75) 5041cm | 76) 6241m  | 77) 64in   |
| 78) 3136m  | 79) 196in  | 80) 2401ft | 81) 2809cm | 82) 4225cm | 83) 3364ft | 84) 484in  |
| 85) 225in  | 86) 7396in | 87) 3249m  | 88) 5329m  | 89) 3364cm | 90) 3364cm | 91) 4356cm |
| 92) 2500m  | 93) 1156cm | 94) 2401m  | 95) 2401cm | 96) 2601m  | 97) 8100ft | 98) 400m   |
| 99) 196m   | 100) 9604m |            |            |            |            |            |